


uitwerkbijlage

Naam kandidaat _____


Kandidaatnummer _____

1


a




b



c



d



- 8 Maak de zinnen compleet zodat er juiste beweringen ontstaan.
- Als de spanning van de spanningsbron lager is dan de drempelspanning, is de stroomsterkte in de schakeling A.
 - De spanning over de weerstand is V.
 - De spanning over de LED is de spanning van de spanningsbron.